

Math 213 - Change of Variables, Part II

Peter A. Perry

University of Kentucky

November 4, 2019

Reminders

- Homework C5 on 15.9 (change of variables) is due Wednesday Night
- Quiz # 8 on 15.7-15.8 (triple integrals in cylindrical and spherical coordinates) takes place in Thursday's recitation)
- Homework C7 on section 16.1 (Vector fields) is due on Friday

Unit III: Multiple Integrals, Vector Fields

Double Integrals in Polar Coordinates

Triple Integrals (Part I)

Triple Integrals (Part II)

Triple Integrals in Cylindrical Coordinates

Triple Integrals in Spherical Coordinates

Change of Variables, Part I

Change of Variables, Part II

Vector Fields

Line Integrals (Scalar functions)

Line Integrals (Vector functions)

Exam III Review

Goals of the Day

- Understand what a transformation T between two regions in space is
- Understand how to compute the *Jacobian Matrix* and *Jacobian determinant* of a transformation and understand what the Jacobian determinant measures
- Understand how to compute triple integrals using the change of variables formula

Change of Variable: $uv \rightarrow xy$

If $x = g(u, v)$, $y = h(u, v)$, and if the region S in the uv plane is mapped to the region R in the xy plane, then

$$\iint_R f(x, y) dA = \iint_S f(x(u, v), y(u, v)) \left| \frac{\partial(x, y)}{\partial(u, v)} \right| du dv$$

The *Jacobian determinant*

$$\frac{\partial(x, y)}{\partial(u, v)} = \begin{vmatrix} \frac{\partial x}{\partial u} & \frac{\partial x}{\partial v} \\ \frac{\partial y}{\partial u} & \frac{\partial y}{\partial v} \end{vmatrix}$$

measures how areas change under the map $(u, v) \mapsto (x, y)$.

A way to remember the change of variables formula

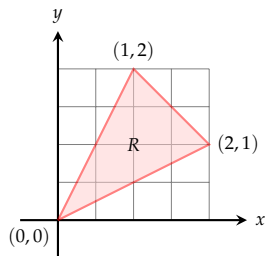
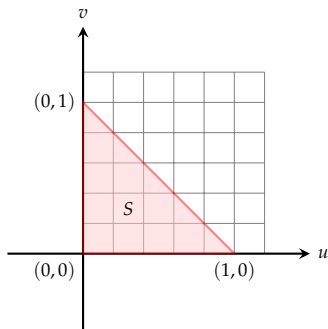
$$dA = \underbrace{\left| \frac{\partial(x, y)}{\partial(u, v)} \right|}_{\text{Area change factor}} \underbrace{du dv}_{dA \text{ in } uv \text{ plane}}$$

Example: Change of Variable uv to xy

$$\iint_R f(x,y) dA = \iint_S f(x(u,v), y(u,v)) \left| \frac{\partial(x,y)}{\partial(u,v)} \right| du dv$$

Problem Find $\iint_R (x - 3y) dA$ if R is the triangular region with vertices $(0,0)$, $(2,1)$ and $(1,2)$. Use the transformation $x = 2u + v$, $y = u + 2v$.

Hint: You'll need to find u and v in terms of x and y to find the region S

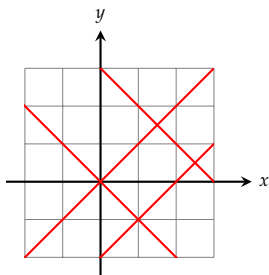


Example: Change of Variable uv to xy

$$\iint_R f(x, y) dA = \iint_S f(x(u, v), y(u, v)) \left| \frac{\partial(x, y)}{\partial(u, v)} \right| du dv$$

Problem: Find $\iint_R (x + y)e^{x^2 - y^2} dA$ if R is the rectangle enclosed by $x - y = 0$, $x - y = 2$, $x + y = 0$, and $x + y = 3$.

What coordinates u and v are natural in this problem?

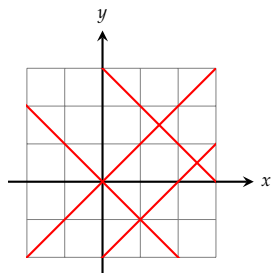
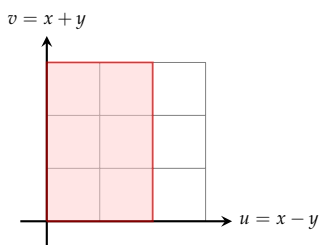


Example: Change of Variable uv to xy

$$\iint_R f(x, y) dA = \iint_S f(x(u, v), y(u, v)) \left| \frac{\partial(x, y)}{\partial(u, v)} \right| du dv$$

Problem: Find $\iint_R (x + y)e^{x^2 - y^2} dA$ if R is the rectangle enclosed by $x - y = 0$, $x - y = 2$, $x + y = 0$, and $x + y = 3$.

What coordinates u and v are natural in this problem?



Preview: Change of Variable: uvw to xyz

If

$$x = g(u, v, w), \quad y = h(u, v, w), \quad z = k(u, v, w)$$

and the region S in uvw space is mapped to R in xyz space, then

$$\iiint_R f(x, y, z) dV = \iiint_S f(x(u, v, w), y(u, v, w), z(u, v, w)) \left| \frac{\partial(x, y, z)}{\partial(u, v, w)} \right| du dv dw$$

where

$$\frac{\partial(x, y, z)}{\partial(u, v, w)} = \begin{vmatrix} \frac{\partial x}{\partial u} & \frac{\partial x}{\partial v} & \frac{\partial x}{\partial w} \\ \frac{\partial y}{\partial u} & \frac{\partial y}{\partial v} & \frac{\partial y}{\partial w} \\ \frac{\partial z}{\partial u} & \frac{\partial z}{\partial v} & \frac{\partial z}{\partial w} \end{vmatrix}$$

Cylindrical and Spherical Coordinates

Recall that the *Jacobian determinant* is

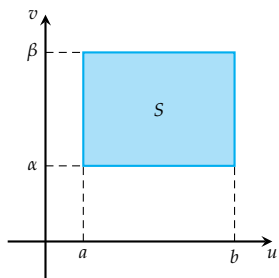
$$\frac{\partial(x, y, z)}{\partial(u, v, w)} = \begin{vmatrix} \frac{\partial x}{\partial u} & \frac{\partial x}{\partial v} & \frac{\partial x}{\partial w} \\ \frac{\partial y}{\partial u} & \frac{\partial y}{\partial v} & \frac{\partial y}{\partial w} \\ \frac{\partial z}{\partial u} & \frac{\partial z}{\partial v} & \frac{\partial z}{\partial w} \end{vmatrix}$$

Find the Jacobian determinant if:

- (1) $x = u \cos v$, $y = u \sin v$, $z = w$ (cylindrical)
- (2) $x = u \sin w \cos v$, $y = u \sin w \sin v$, $z = u \cos w$ (spherical)

What's the connection with these formulas and formulas for integration in cylindrical and spherical coordinates?

Polar Coordinates



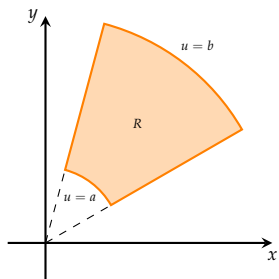
The transformation

$$x = u \cos v, y = u \sin v$$

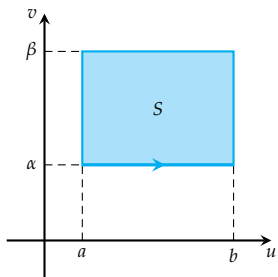
maps a rectangle S in the uv plane to a *polar rectangle* R in the xy plane

The Jacobian of this transformation is

$$\begin{vmatrix} \cos v & -u \sin v \\ \sin v & u \cos v \end{vmatrix} = u$$



Polar Coordinates



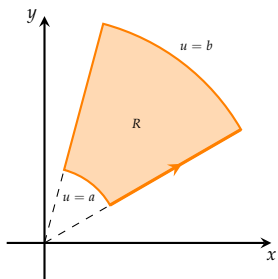
The transformation

$$x = u \cos v, y = u \sin v$$

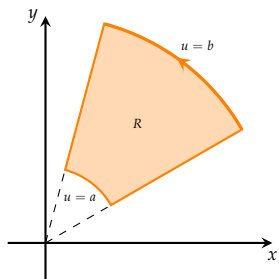
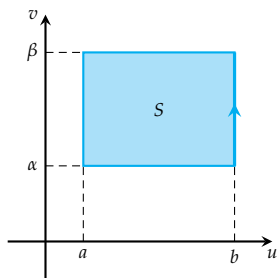
maps a rectangle S in the uv plane to a *polar rectangle* R in the xy plane

The Jacobian of this transformation is

$$\begin{vmatrix} \cos v & -u \sin v \\ \sin v & u \cos v \end{vmatrix} = u$$



Polar Coordinates



The transformation

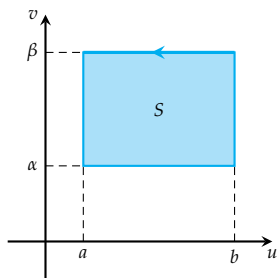
$$x = u \cos v, y = u \sin v$$

maps a rectangle S in the uv plane to a *polar rectangle* R in the xy plane

The Jacobian of this transformation is

$$\begin{vmatrix} \cos v & -u \sin v \\ \sin v & u \cos v \end{vmatrix} = u$$

Polar Coordinates



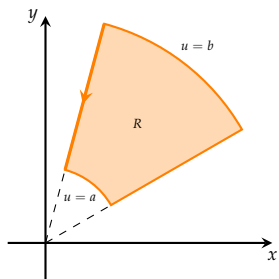
The transformation

$$x = u \cos v, y = u \sin v$$

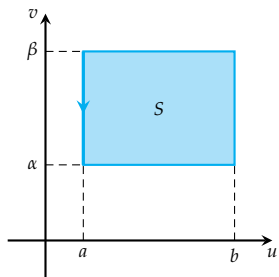
maps a rectangle S in the uv plane to a *polar rectangle* R in the xy plane

The Jacobian of this transformation is

$$\begin{vmatrix} \cos v & -u \sin v \\ \sin v & u \cos v \end{vmatrix} = u$$



Polar Coordinates



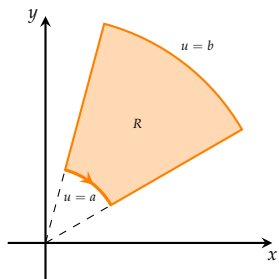
The transformation

$$x = u \cos v, y = u \sin v$$

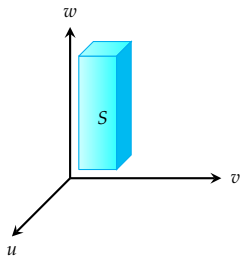
maps a rectangle S in the uv plane to a *polar rectangle* R in the xy plane

The Jacobian of this transformation is

$$\begin{vmatrix} \cos v & -u \sin v \\ \sin v & u \cos v \end{vmatrix} = u$$



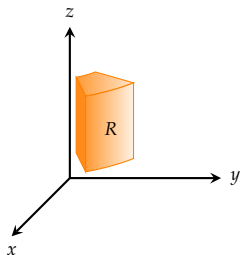
Cylindrical Coordinates



The transformation

$$x = u \cos v, \quad y = u \sin v, \quad z = w$$

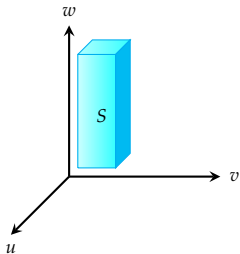
maps a box in the uvw plane to a 'cylindrical wedge' in xyz space



The Jacobian of this transformation is

$$\begin{vmatrix} \cos v & -u \sin v & 0 \\ \sin v & u \cos v & 0 \\ 0 & 0 & 1 \end{vmatrix} = u$$

Spherical Coordinates



The transformation

$$x = u \sin(w) \cos(v)$$

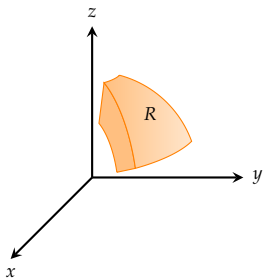
$$y = u \sin(w) \sin(v)$$

$$z = u \cos(w)$$

maps a box in the uvw plane to a 'spherical wedge' in xyz space

The Jacobian of this transformation is

$$u^2 \sin(w)$$



Volume of an Ellipsoid

Find the volume enclosed by the ellipsoid

$$\frac{x^2}{a^2} + \frac{y^2}{b^2} + \frac{z^2}{c^2} = 1$$

using the transformation

$$x = au, \quad y = bv, \quad z = cw$$